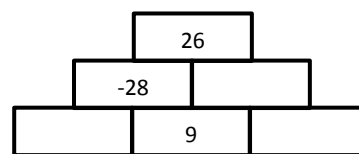
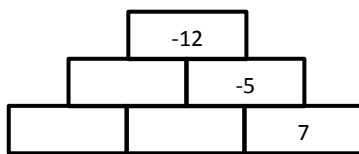
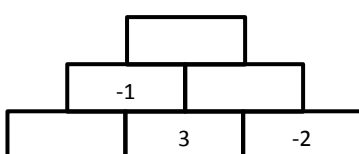
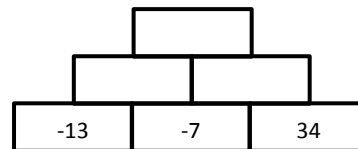
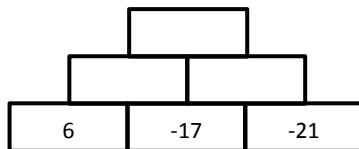
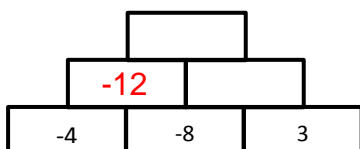


Negative Number Pyramids



Section A: Add the two previous blocks below, the first one has been done for you



Section B: Subtract the two previous blocks below, the first one has been done for you

