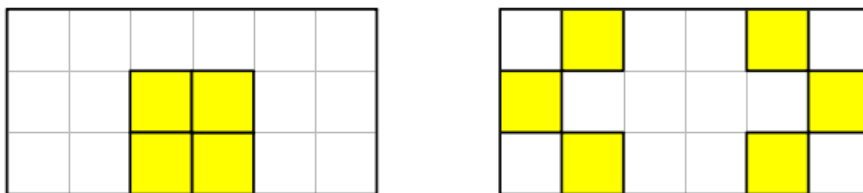
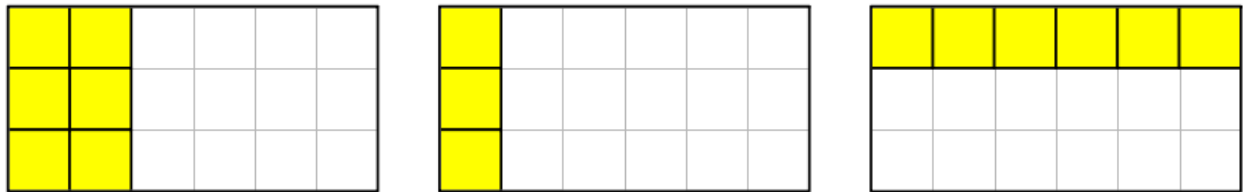

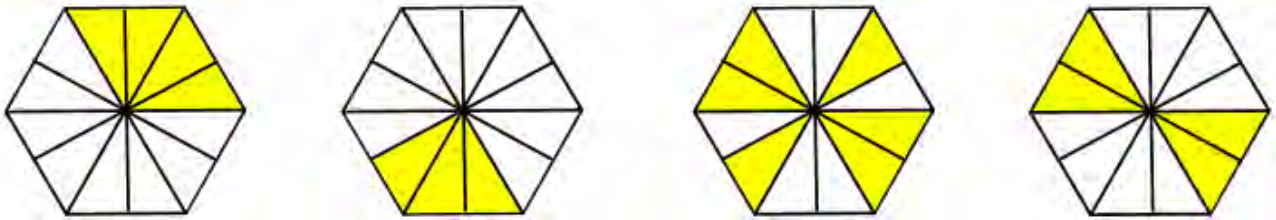
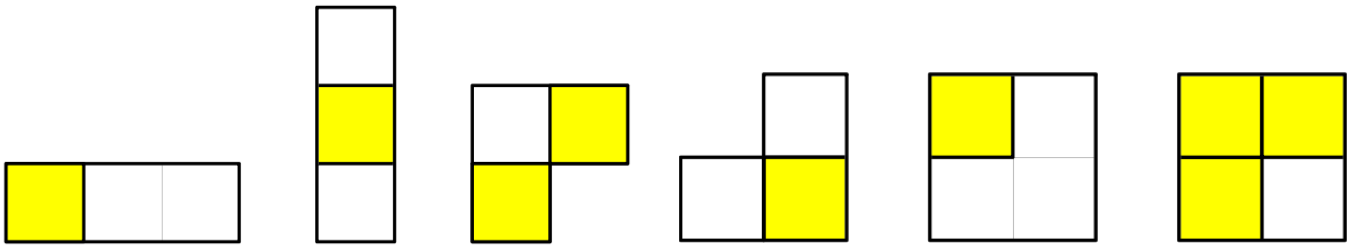




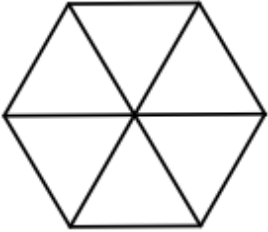
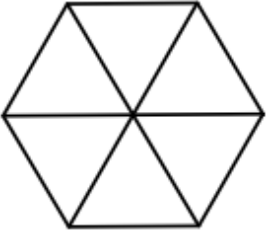
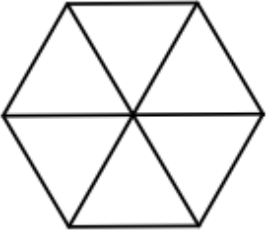
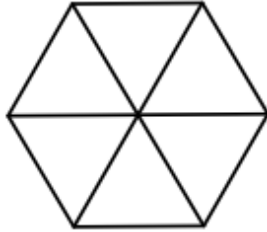
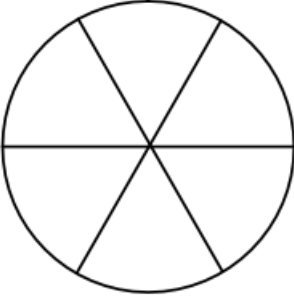
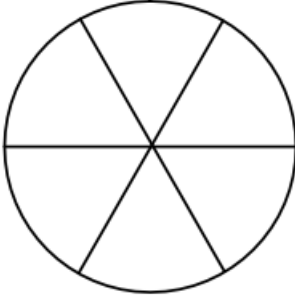
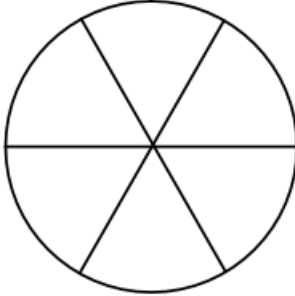
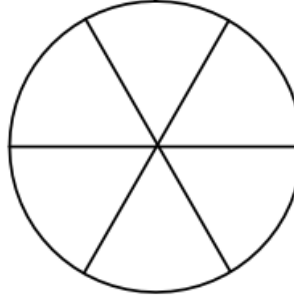




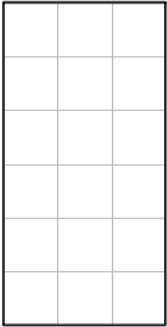
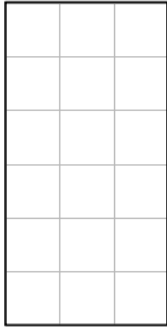
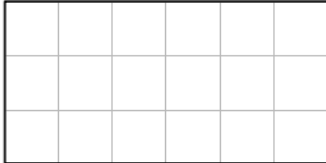
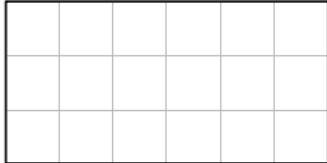
**Section A:** Tick the diagrams which show fractions equivalent to  $\frac{1}{3}$



Write all the fractions above equivalent to  $\frac{1}{3}$

What do you notice?

**Section B: Shade  $\frac{1}{3}$**

			
Equivalent fraction =	Equivalent fraction =	Equivalent fraction =	Equivalent fraction =
			
Equivalent fraction =	Equivalent fraction =	Equivalent fraction =	Equivalent fraction =
			
Equivalent fraction =	Equivalent fraction =	Equivalent fraction =	Equivalent fraction =
			
Equivalent fraction =	Equivalent fraction =	Equivalent fraction =	Equivalent fraction =

**Section C**

$$\frac{1}{3} = \frac{2}{\square}$$

$$\frac{1}{3} = \frac{6}{\square}$$

$$\frac{1}{3} = \frac{\square}{12}$$

$$\frac{1}{3} = \frac{\square}{21}$$

$$\frac{1}{3} = \frac{\square}{99}$$

$$\frac{1}{3} = \frac{3}{\square}$$

$$\frac{1}{3} = \frac{7}{\square}$$

$$\frac{1}{3} = \frac{\square}{9}$$

$$\frac{1}{3} = \frac{\square}{27}$$

$$\frac{1}{3} = \frac{20}{\square}$$

$$\frac{1}{3} = \frac{4}{\square}$$

$$\frac{1}{3} = \frac{8}{\square}$$

$$\frac{1}{3} = \frac{\square}{36}$$

$$\frac{1}{3} = \frac{\square}{33}$$

$$\frac{1}{3} = \frac{\square}{120}$$

$$\frac{1}{3} = \frac{5}{\square}$$

$$\frac{1}{3} = \frac{9}{\square}$$

$$\frac{1}{3} = \frac{\square}{30}$$

$$\frac{1}{3} = \frac{\square}{60}$$

$$\frac{1}{3} = \frac{25}{\square}$$