
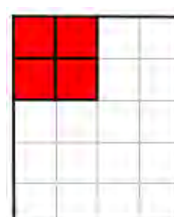



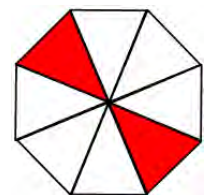
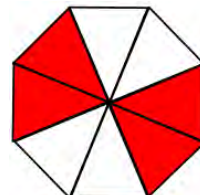
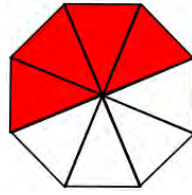
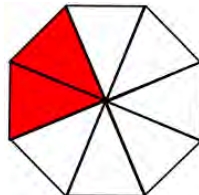
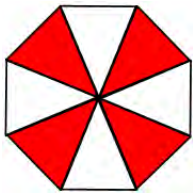
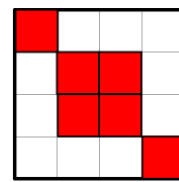
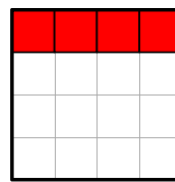
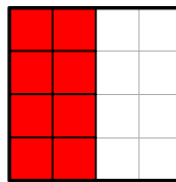
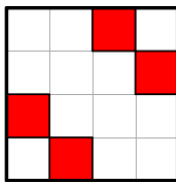
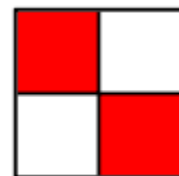

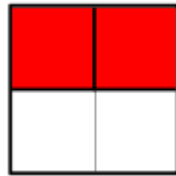





**Section A:** Tick the diagrams which show fractions equivalent to  $\frac{1}{4}$

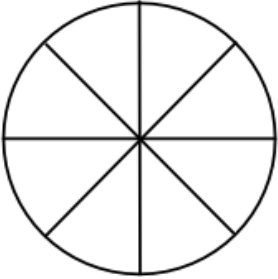
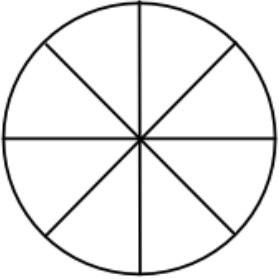
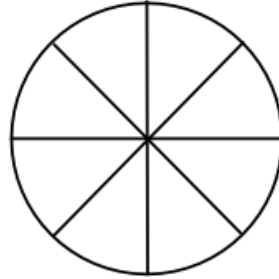
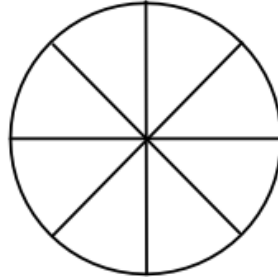






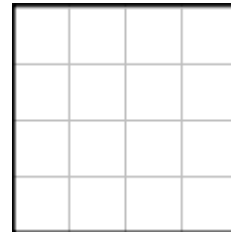







Write all the fractions above equivalent to  $\frac{1}{4}$

--

What do you notice?

**Section B: Shade  $\frac{1}{4}$**

			
Equivalent fraction =	Equivalent fraction =	Equivalent fraction =	Equivalent fraction =
			
Equivalent fraction =	Equivalent fraction =	Equivalent fraction =	Equivalent fraction =
			
Equivalent fraction =	Equivalent fraction =	Equivalent fraction =	Equivalent fraction =
			
Equivalent fraction =	Equivalent fraction =	Equivalent fraction =	Equivalent fraction =

**Section C**

$$\frac{1}{4} = \frac{2}{\square}$$

$$\frac{1}{4} = \frac{6}{\square}$$

$$\frac{1}{4} = \frac{\square}{16}$$

$$\frac{1}{4} = \frac{\square}{12}$$

$$\frac{1}{4} = \frac{\square}{36}$$

$$\frac{1}{4} = \frac{3}{\square}$$

$$\frac{1}{4} = \frac{7}{\square}$$

$$\frac{1}{4} = \frac{\square}{20}$$

$$\frac{1}{4} = \frac{\square}{28}$$

$$\frac{1}{4} = \frac{22}{\square}$$

$$\frac{1}{4} = \frac{4}{\square}$$

$$\frac{1}{4} = \frac{8}{\square}$$

$$\frac{1}{4} = \frac{\square}{24}$$

$$\frac{1}{4} = \frac{\square}{40}$$

$$\frac{1}{4} = \frac{\square}{120}$$

$$\frac{1}{4} = \frac{5}{\square}$$

$$\frac{1}{4} = \frac{9}{\square}$$

$$\frac{1}{4} = \frac{\square}{32}$$

$$\frac{1}{4} = \frac{\square}{80}$$

$$\frac{1}{4} = \frac{21}{\square}$$