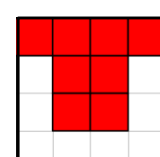
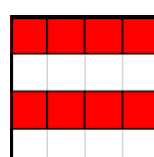
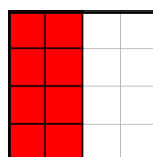

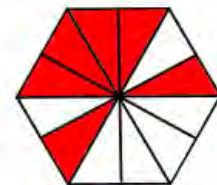
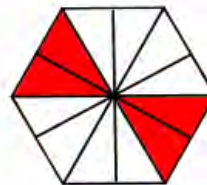
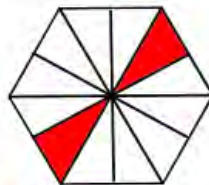
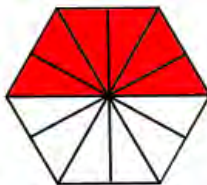
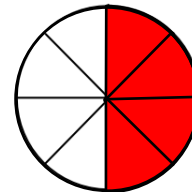
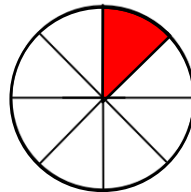
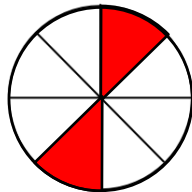
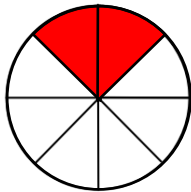

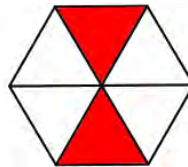
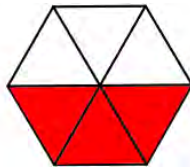

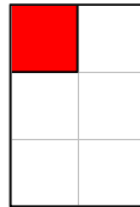
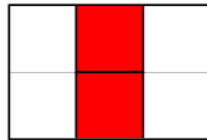

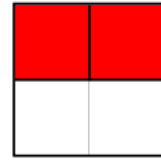
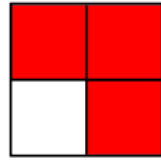
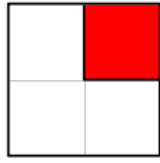



Fractions Equivalent to One Half



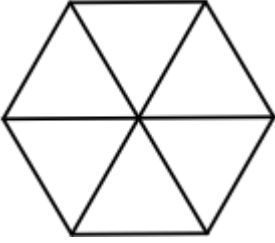
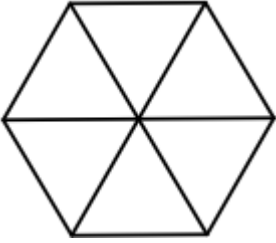
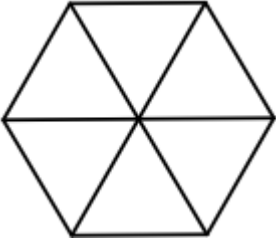
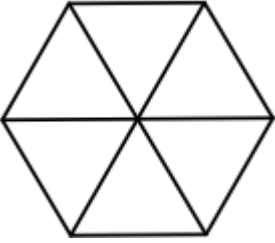
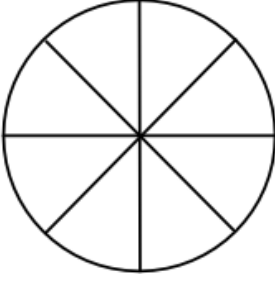
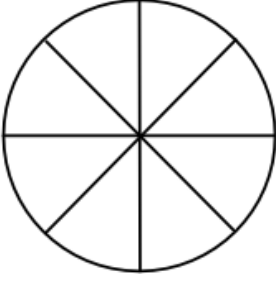
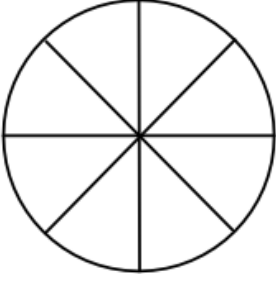
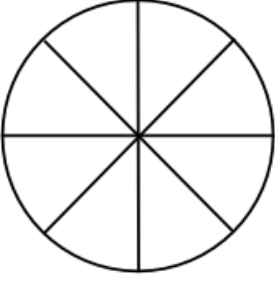
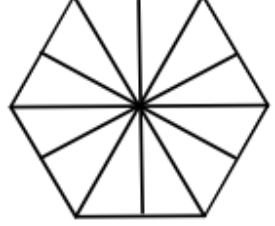
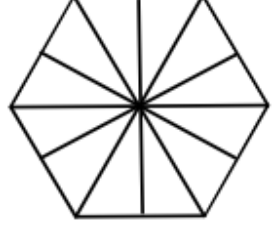
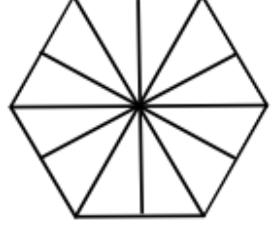
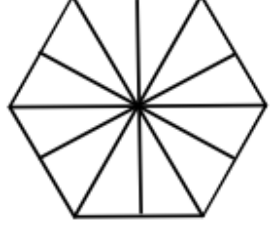
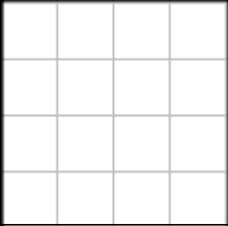



Section A: Tick the diagrams which show fractions equivalent to $\frac{1}{2}$



Write all the fractions above equivalent to $\frac{1}{2}$

What do you notice?

Section B: Shade $\frac{1}{2}$

			
Equivalent fraction =	Equivalent fraction =	Equivalent fraction =	Equivalent fraction =
			
Equivalent fraction =	Equivalent fraction =	Equivalent fraction =	Equivalent fraction =
			
Equivalent fraction =	Equivalent fraction =	Equivalent fraction =	Equivalent fraction =
			
Equivalent fraction =	Equivalent fraction =	Equivalent fraction =	Equivalent fraction =

Section C

$$\frac{1}{2} = \frac{2}{\square}$$

$$\frac{1}{2} = \frac{6}{\square}$$

$$\frac{1}{2} = \frac{\square}{16}$$

$$\frac{1}{2} = \frac{\square}{18}$$

$$\frac{1}{2} = \frac{\square}{36}$$

$$\frac{1}{2} = \frac{3}{\square}$$

$$\frac{1}{2} = \frac{7}{\square}$$

$$\frac{1}{2} = \frac{\square}{20}$$

$$\frac{1}{2} = \frac{\square}{26}$$

$$\frac{1}{2} = \frac{22}{\square}$$

$$\frac{1}{2} = \frac{4}{\square}$$

$$\frac{1}{2} = \frac{8}{\square}$$

$$\frac{1}{2} = \frac{\square}{22}$$

$$\frac{1}{2} = \frac{\square}{40}$$

$$\frac{1}{2} = \frac{\square}{120}$$

$$\frac{1}{2} = \frac{5}{\square}$$

$$\frac{1}{2} = \frac{9}{\square}$$

$$\frac{1}{2} = \frac{\square}{30}$$

$$\frac{1}{2} = \frac{\square}{50}$$

$$\frac{1}{2} = \frac{71}{\square}$$