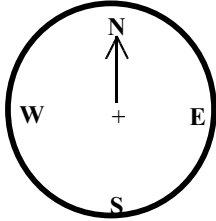


Name:

Date:

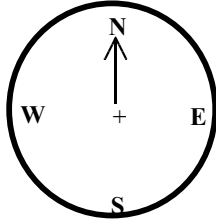
Compass Points 2

1) I am facing North and make a 90° turn clockwise, where am I facing now?



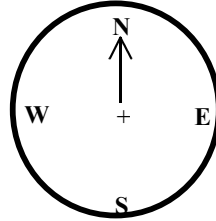
Answer

2) I am facing North and turn clockwise to the East, how many far have I turned?



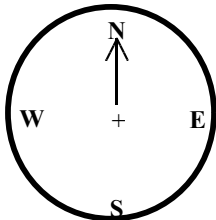
Answer

3) I am facing North and turn a right angle clockwise, where am I facing now?



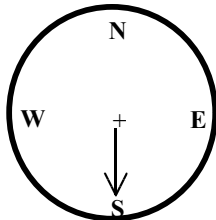
Answer

4) I am facing North and I turn to face South, how far have I turned?



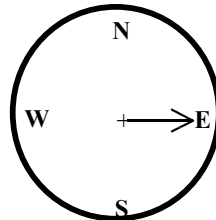
Answer

5) I am facing South and I turn 90° clockwise, where am I facing now?



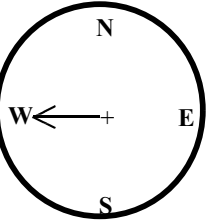
Answer

6) I am facing East and I turn 180° clockwise, where am I facing now?



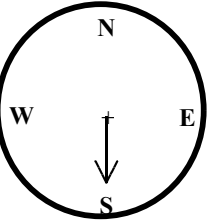
Answer

7) I am facing West and I turn anticlockwise $\frac{3}{4}$ of a turn, where am I facing?



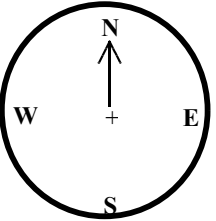
Answer

8) I am facing South and I turn to the North, how far have I turned?



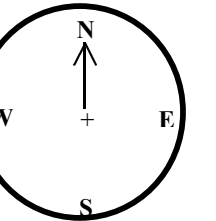
Answer

9) I am facing North and I turn a full turn anticlockwise, where am I facing now?



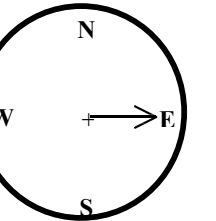
Answer

10) I am facing North and I turn 180° clockwise, where am I facing now?



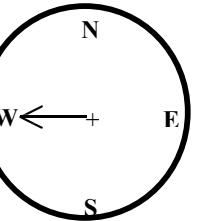
Answer

11) I am facing East and turn clockwise to the South, how many degrees have I turned?



Answer

12) I am facing West and I turn clockwise to the South, how far have I turned?



Answer