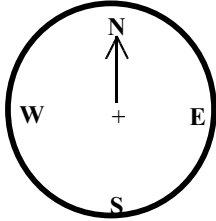


Name:

Date:

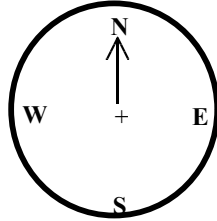
# Compass Points

1) I am facing North and make a  $\frac{1}{4}$  turn clockwise, where am I facing now?



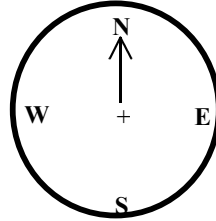
Answer

2) I am facing North and make a  $\frac{3}{4}$  turn clockwise where am I facing?



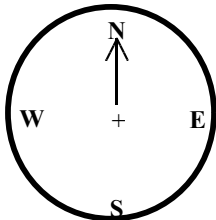
Answer

3) I am facing North and turn  $\frac{1}{2}$  a turn clockwise, where am I facing now?



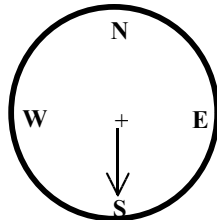
Answer

4) I am facing North and I turn a full turn clockwise, where am I facing now?



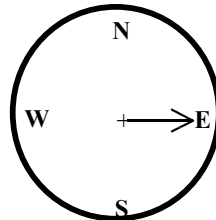
Answer

5) I am facing South and I turn a  $\frac{1}{4}$  turn clockwise, where am I facing now?



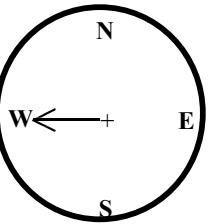
Answer

6) I am facing East and I turn a full turn clockwise, where am I facing now?



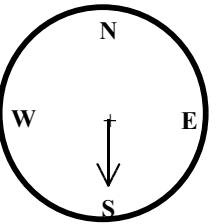
Answer

7) I am facing West and I turn clockwise  $\frac{1}{2}$  a turn, where am I facing?



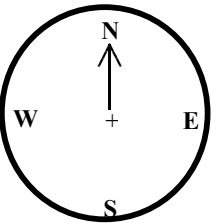
Answer

8) I am facing South and I turn a  $\frac{1}{4}$  turn anticlockwise, where am I facing now?



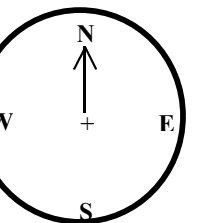
Answer

9) I am facing North and I turn a  $\frac{1}{4}$  turn anticlockwise, where am I facing now?



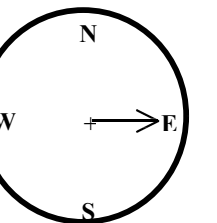
Answer

10) I am facing North and I turn  $90^\circ$  clockwise, where am I facing now?



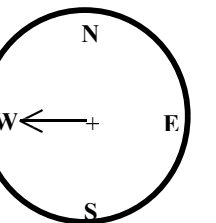
Answer

11) I am facing East and I turn  $90^\circ$  clockwise, where am I facing now?



Answer

12) I am facing West and I turn  $90^\circ$  anticlockwise, where am I facing now?



Answer