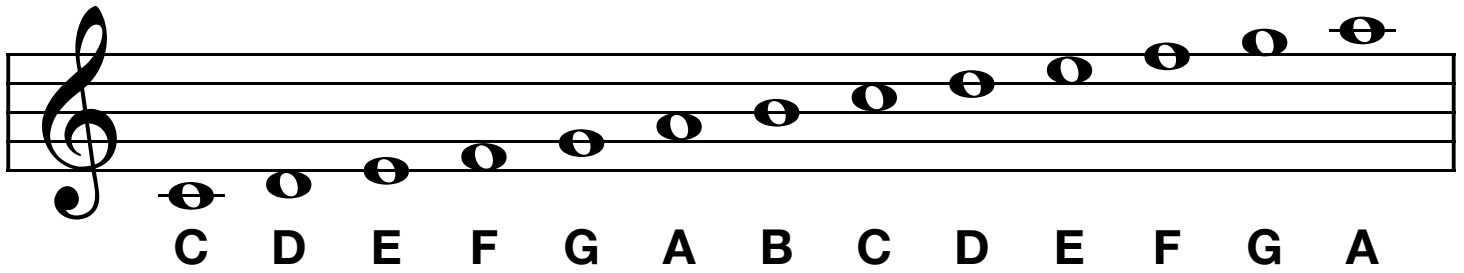
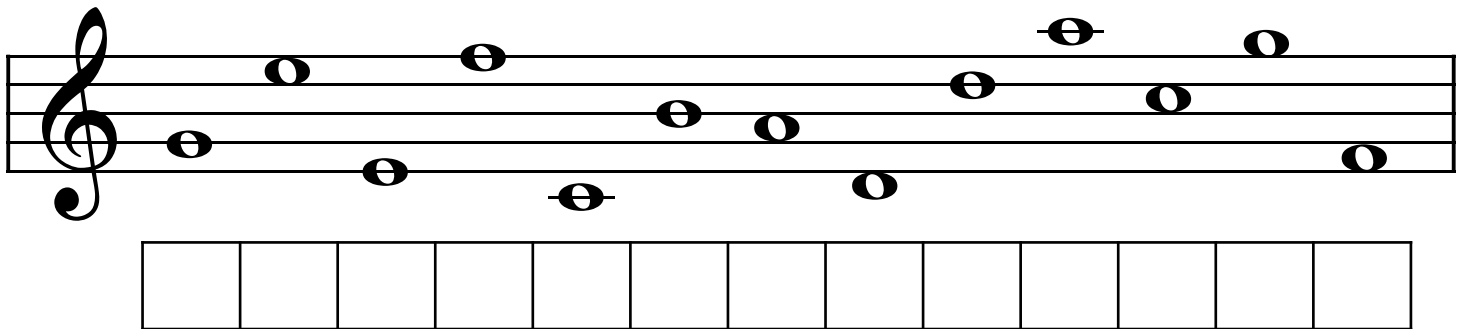


Name That Note!

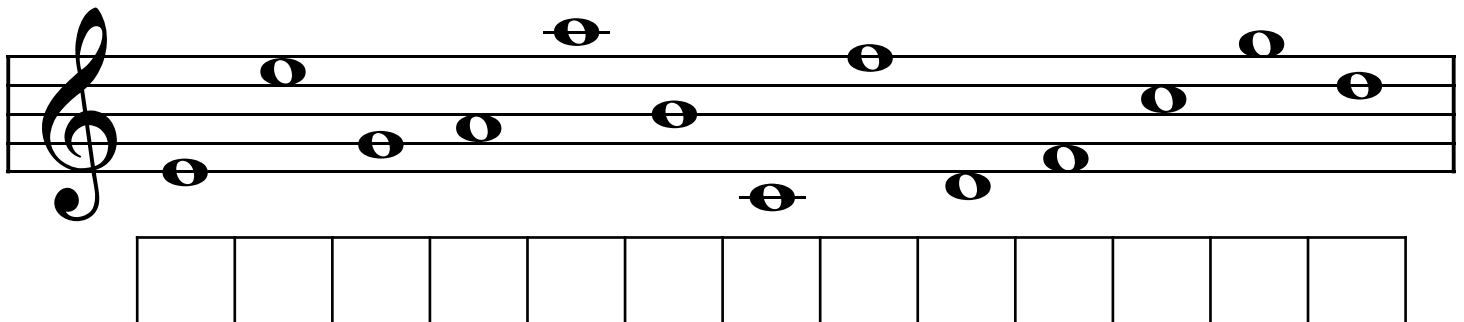


A musical staff with a treble clef. It contains 13 whole notes, each with a letter name written below it. The notes are: C (bottom line), D (first space), E (second line), F (second space), G (third line), A (third space), B (fourth line), C (fourth space), D (fifth line), E (first space above), F (second line above), G (second space above), and A (third line above).

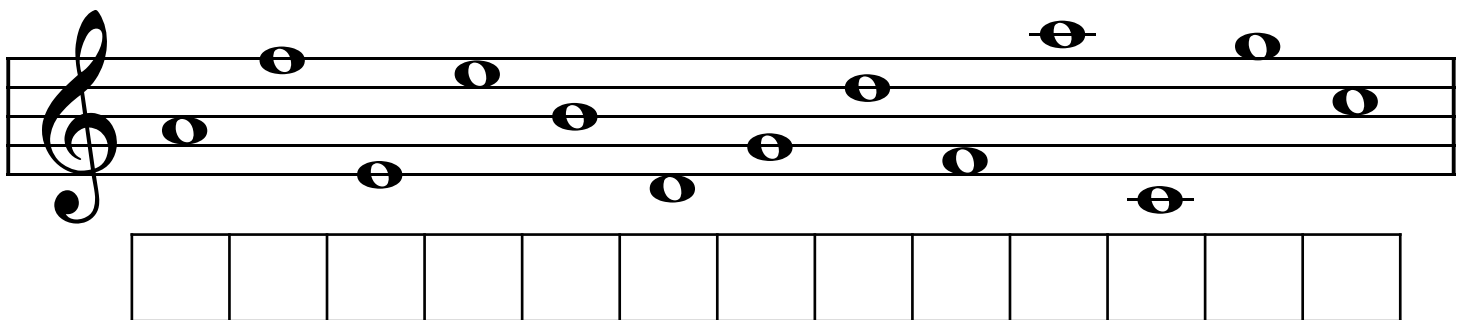
Can you name the notes shown below?
Write the letter names in the boxes under each staff.



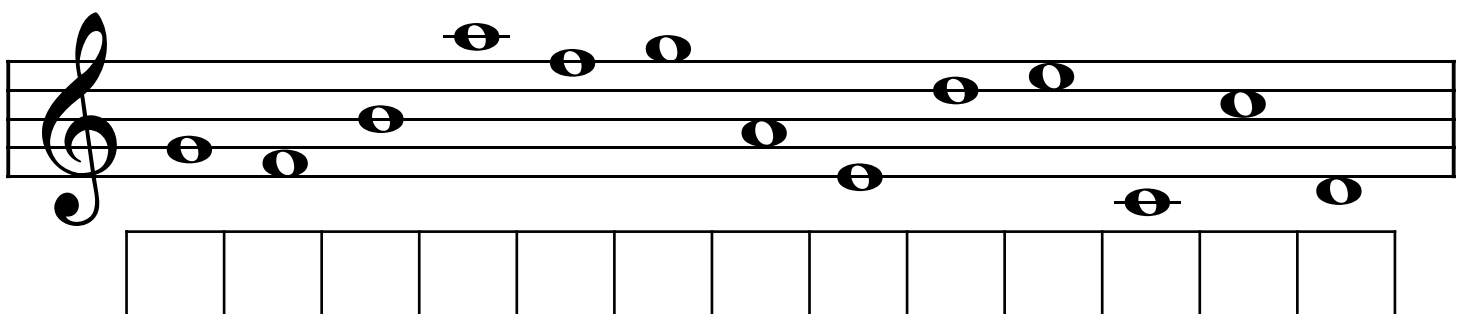
A musical staff with a treble clef containing 13 whole notes. Below the staff is a row of 13 empty boxes for writing the letter names of the notes.



A musical staff with a treble clef containing 13 whole notes. Below the staff is a row of 13 empty boxes for writing the letter names of the notes.

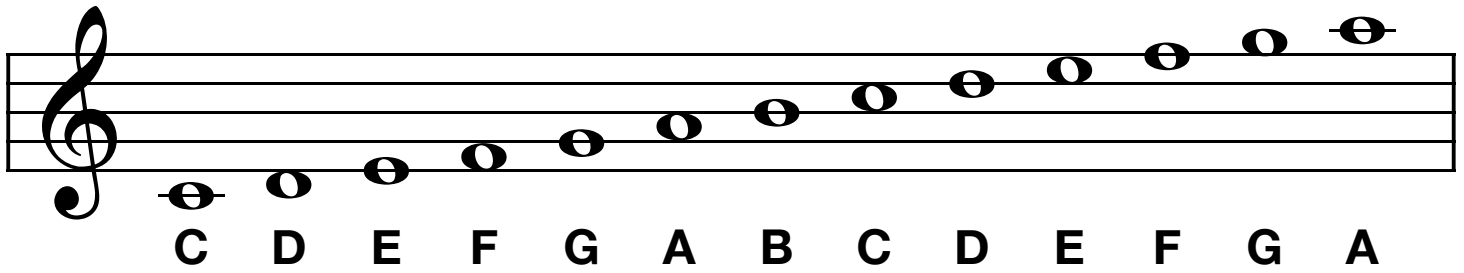


A musical staff with a treble clef containing 13 whole notes. Below the staff is a row of 13 empty boxes for writing the letter names of the notes.



A musical staff with a treble clef containing 13 whole notes. Below the staff is a row of 13 empty boxes for writing the letter names of the notes.

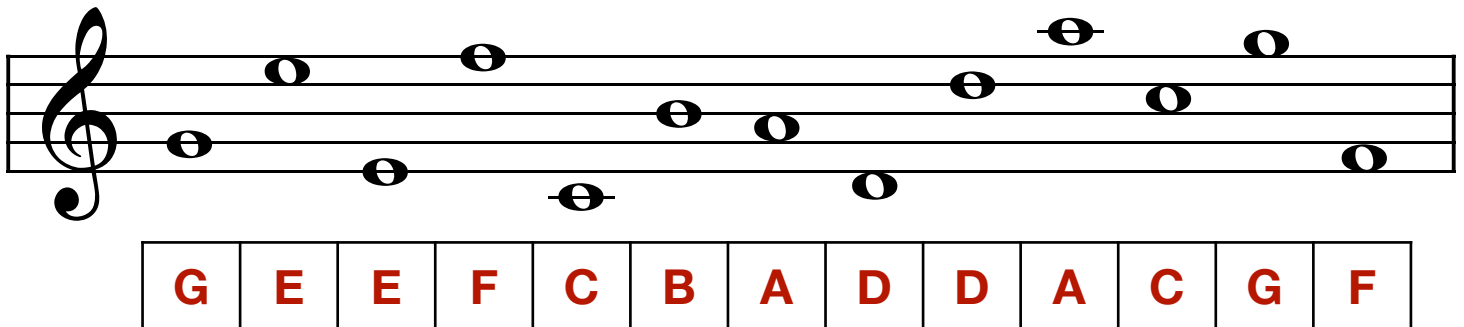
Name That Note!



A musical staff with a treble clef. The notes are: C (bottom line), D (first space), E (second line), F (second space), G (third line), A (third space), B (fourth line), C (fourth space), D (fifth line), E (first space above), F (second line above), G (second space above), A (third line above).

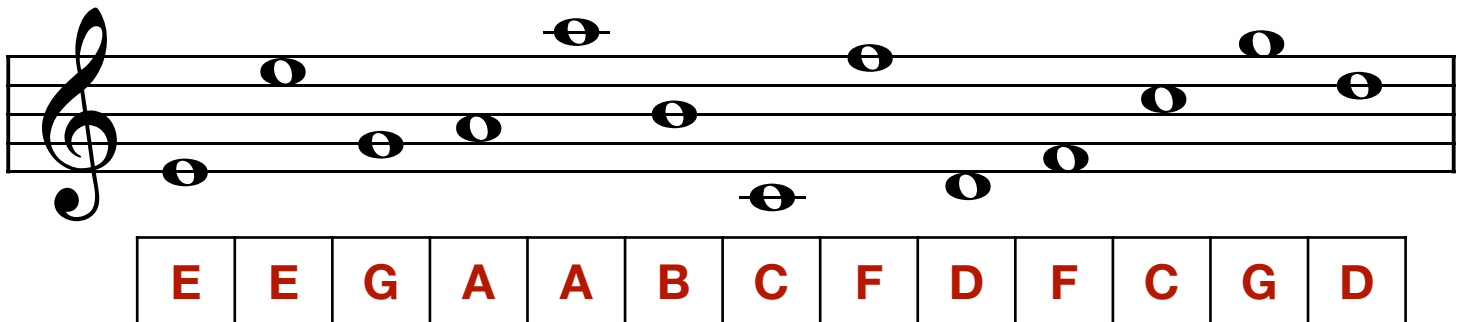
C D E F G A B C D E F G A

Can you name the notes shown below?
Write the letter names in the boxes under each staff.



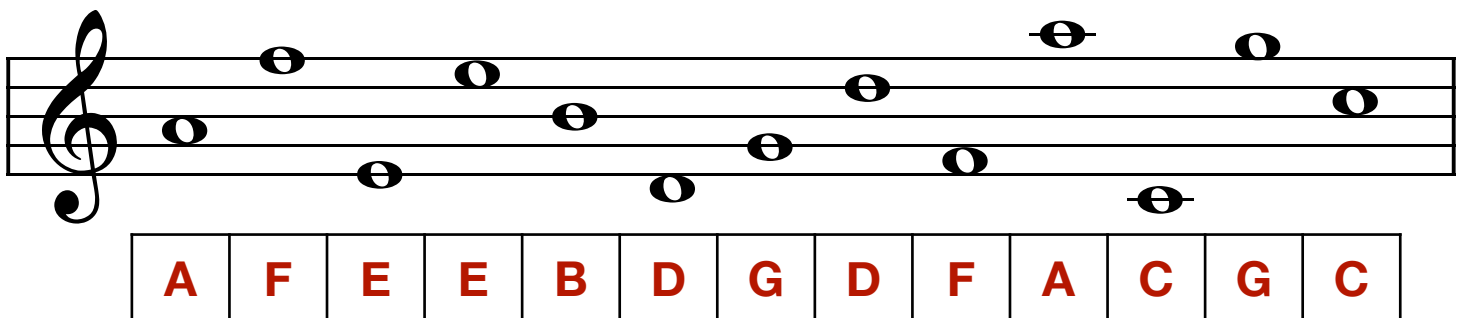
A musical staff with a treble clef. The notes are: G (second space), E (first space), E (first space), F (second line), C (second space), B (third line), A (third space), D (fourth line), D (fourth line), A (fourth space), C (fifth line), G (first space above), F (second line above).

G	E	E	F	C	B	A	D	D	A	C	G	F
---	---	---	---	---	---	---	---	---	---	---	---	---



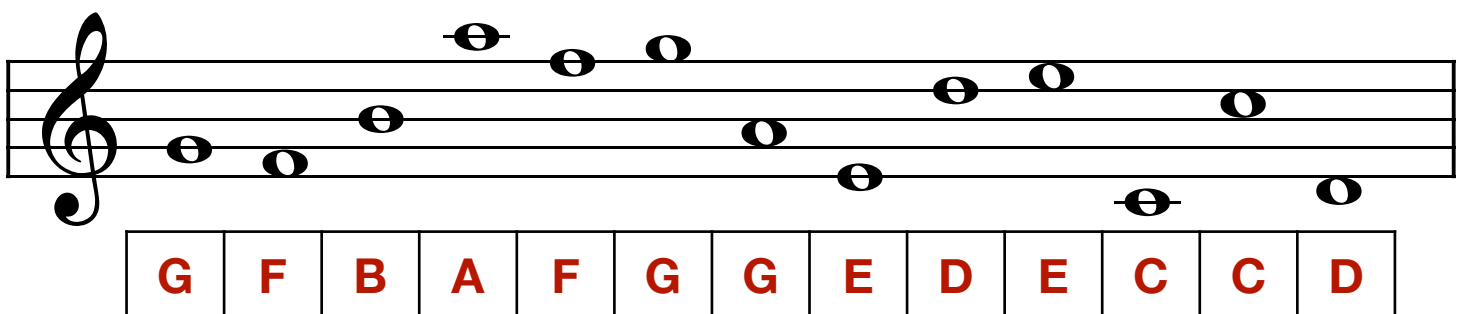
A musical staff with a treble clef. The notes are: E (first space), E (first space), G (second line), A (second space), A (second space), B (third line), C (third space), F (fourth line), D (fourth space), F (fifth line), C (first space above), G (second line above), D (second space above).

E	E	G	A	A	B	C	F	D	F	C	G	D
---	---	---	---	---	---	---	---	---	---	---	---	---



A musical staff with a treble clef. The notes are: A (third space), F (fourth line), E (first space), E (first space), B (third line), D (fourth line), G (fourth space), D (fourth space), F (fifth line), A (first space above), C (second line above), G (second space above), C (third line above).

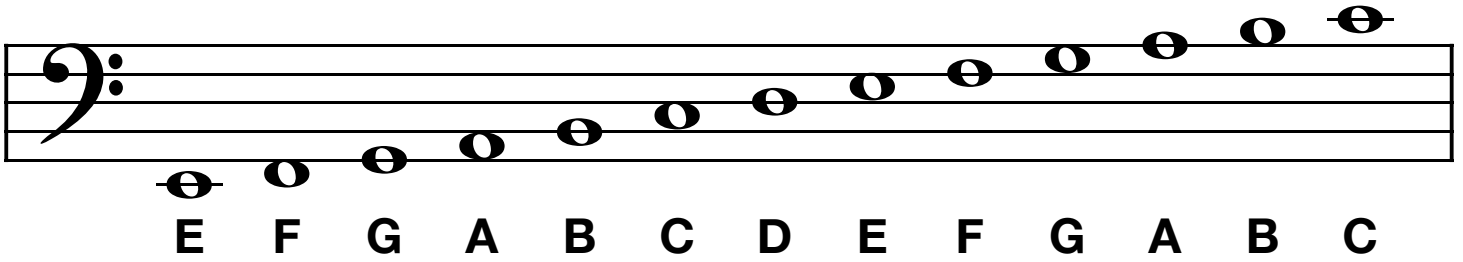
A	F	E	E	B	D	G	D	F	A	C	G	C
---	---	---	---	---	---	---	---	---	---	---	---	---



A musical staff with a treble clef. The notes are: G (second space), F (second space), B (third line), A (third space), F (third space), G (third space), G (third space), E (third space), D (third space), E (third space), C (third space), C (third space), D (third space).

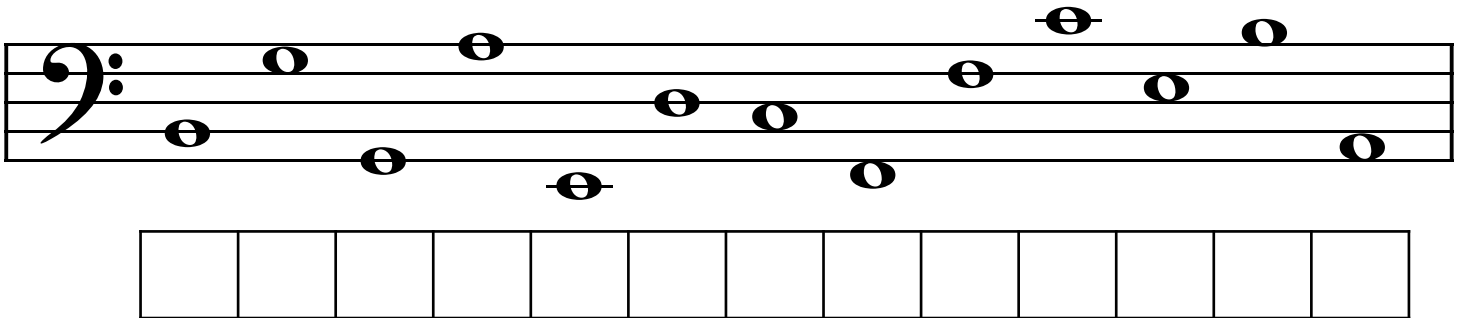
G	F	B	A	F	G	G	E	D	E	C	C	D
---	---	---	---	---	---	---	---	---	---	---	---	---

Name That Note!

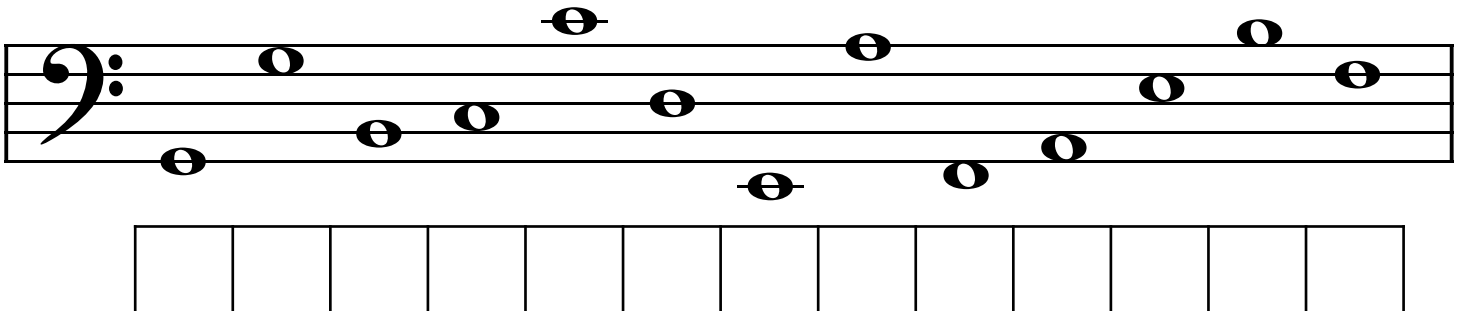


A musical staff in bass clef with a sequence of 13 notes: E, F, G, A, B, C, D, E, F, G, A, B, C. Each note is represented by a half note on a five-line staff. Below the staff, the letter names E, F, G, A, B, C, D, E, F, G, A, B, C are printed in a row.

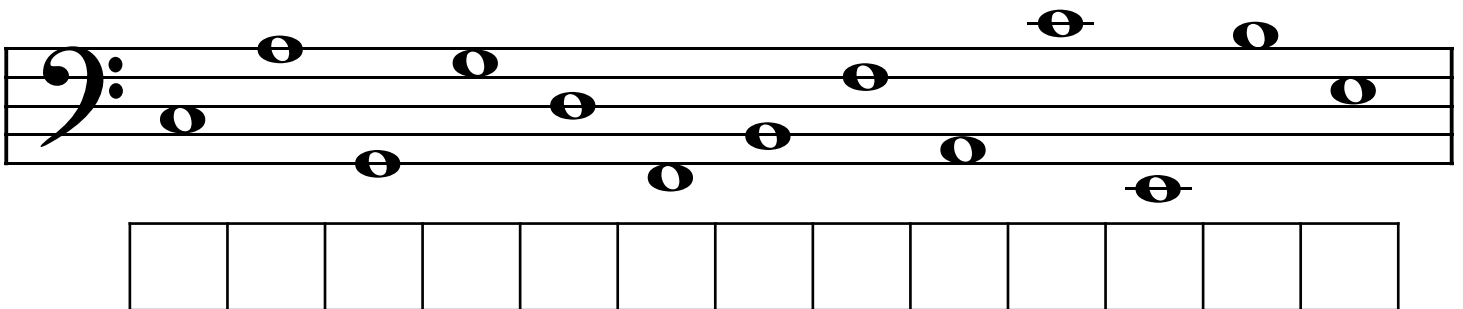
Can you name the notes shown below?
Write the letter names in the boxes under each staff.



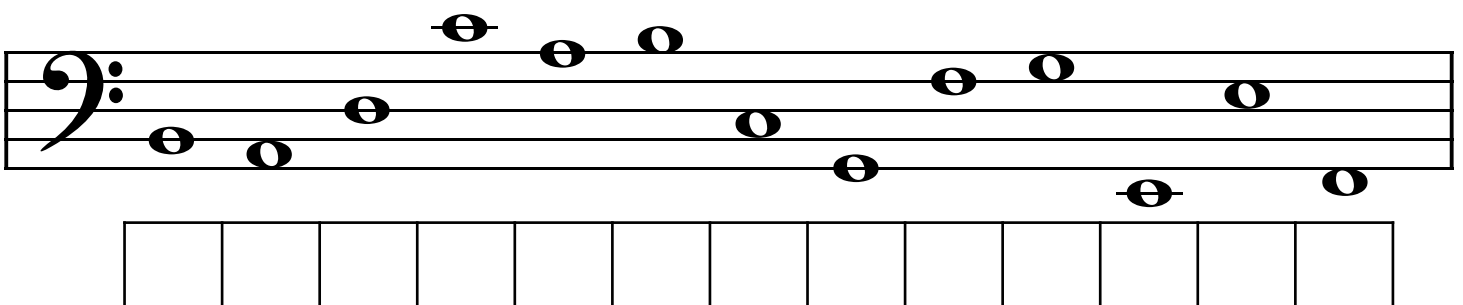
A musical staff in bass clef with 13 notes: E, F, G, A, B, C, D, E, F, G, A, B, C. Below the staff is a row of 13 empty boxes for writing the letter names.



A musical staff in bass clef with 13 notes: E, F, G, A, B, C, D, E, F, G, A, B, C. Below the staff is a row of 13 empty boxes for writing the letter names.

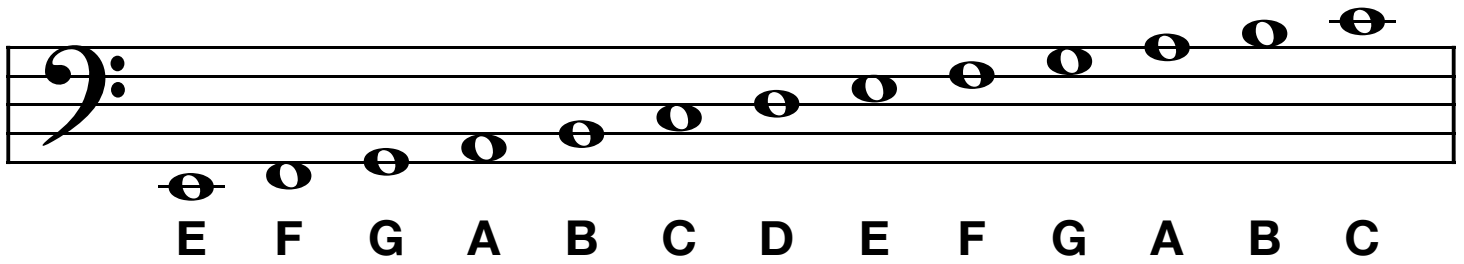


A musical staff in bass clef with 13 notes: E, F, G, A, B, C, D, E, F, G, A, B, C. Below the staff is a row of 13 empty boxes for writing the letter names.



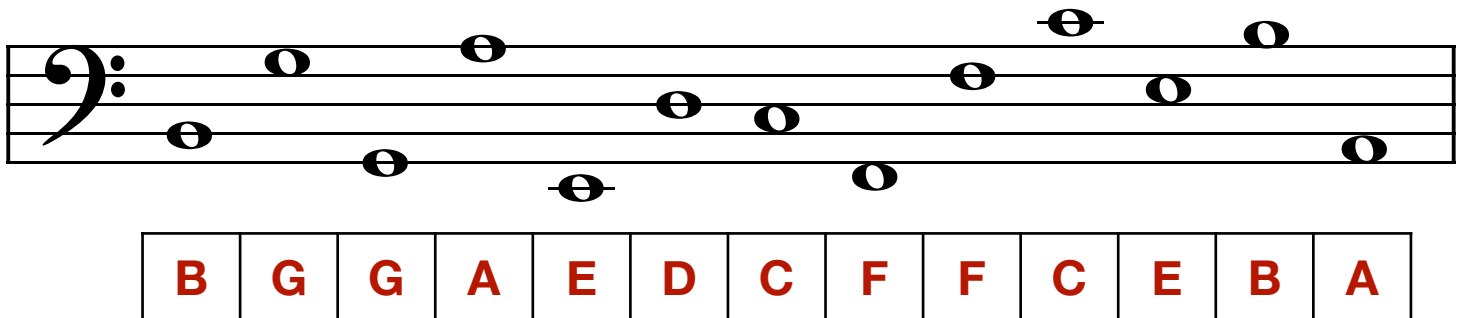
A musical staff in bass clef with 13 notes: E, F, G, A, B, C, D, E, F, G, A, B, C. Below the staff is a row of 13 empty boxes for writing the letter names.

Name That Note!

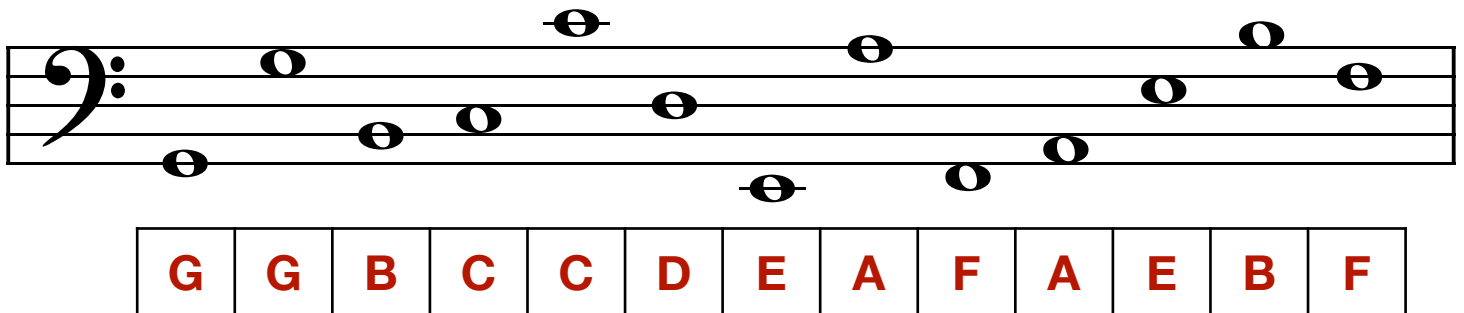


A musical staff in bass clef with a series of notes. Below the staff, the letter names E, F, G, A, B, C, D, E, F, G, A, B, C are written in order from left to right, corresponding to the notes on the staff.

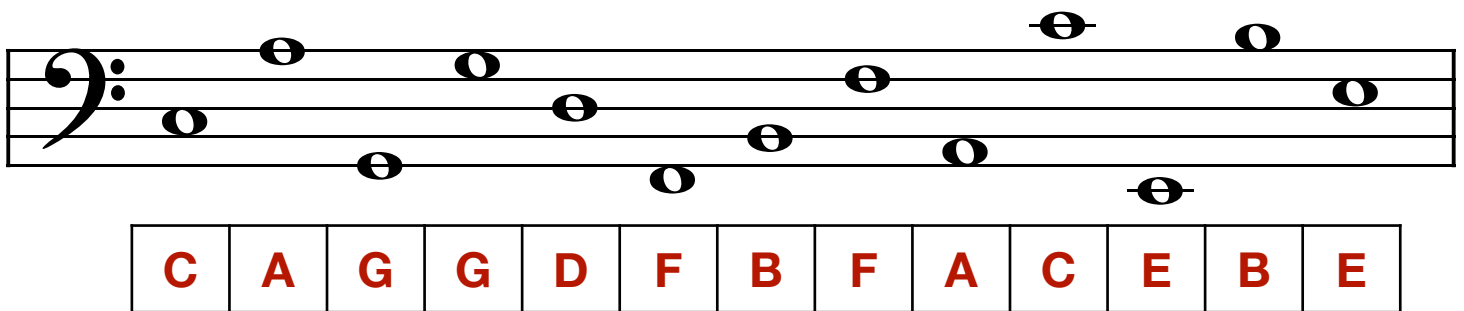
Can you name the notes shown below?
Write the letter names in the boxes under each staff.



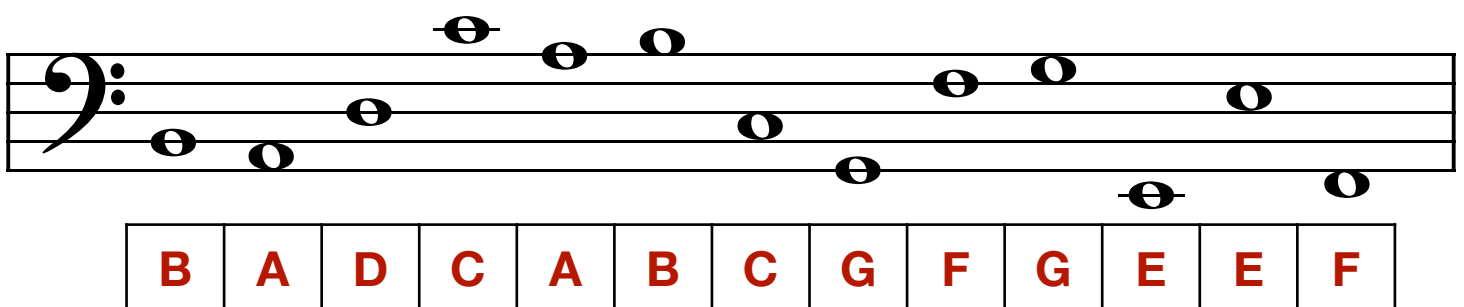
A musical staff in bass clef with notes. Below the staff is a row of 13 boxes, each containing a letter name in red: B, G, G, A, E, D, C, F, F, C, E, B, A.



A musical staff in bass clef with notes. Below the staff is a row of 13 boxes, each containing a letter name in red: G, G, B, C, C, D, E, A, F, A, E, B, F.



A musical staff in bass clef with notes. Below the staff is a row of 13 boxes, each containing a letter name in red: C, A, G, G, D, F, B, F, A, C, E, B, E.



A musical staff in bass clef with notes. Below the staff is a row of 13 boxes, each containing a letter name in red: B, A, D, C, A, B, C, G, F, G, E, E, F.