



# What is the Fraction?

1.  = \_\_\_\_\_

2.  = \_\_\_\_\_


3.  = \_\_\_\_\_

4.  = \_\_\_\_\_


5.  = \_\_\_\_\_

6.  = \_\_\_\_\_

7.  = \_\_\_\_\_


8.  = \_\_\_\_\_


9.  = \_\_\_\_\_


10.  = \_\_\_\_\_


11.  = \_\_\_\_\_

12.  = \_\_\_\_\_


13.  = \_\_\_\_\_


14.  = \_\_\_\_\_


15.  = \_\_\_\_\_

16.  = \_\_\_\_\_

17.  = \_\_\_\_\_

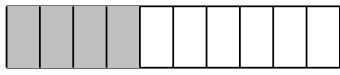
18.  = \_\_\_\_\_

19.  = \_\_\_\_\_

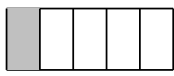
20.  = \_\_\_\_\_




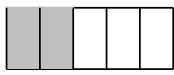
1.  =  $\frac{3}{5}$  \_\_\_\_\_

2.  =  $\frac{2}{5}$  \_\_\_\_\_

3.  =  $\frac{3}{4}$  \_\_\_\_\_

4.  =  $\frac{1}{5}$  \_\_\_\_\_

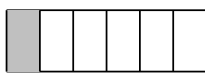
5.  =  $\frac{4}{9}$  \_\_\_\_\_


6.  =  $\frac{2}{5}$  \_\_\_\_\_

7.  =  $\frac{1}{4}$  \_\_\_\_\_


8.  =  $\frac{1}{12}$  \_\_\_\_\_

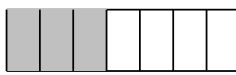
9.  =  $\frac{2}{3}$  \_\_\_\_\_


10.  =  $\frac{1}{6}$  \_\_\_\_\_

11.  =  $\frac{7}{9}$  \_\_\_\_\_

12.  =  $\frac{1}{2}$  \_\_\_\_\_

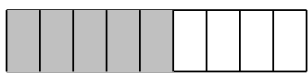
13.  =  $\frac{6}{7}$  \_\_\_\_\_


14.  =  $\frac{3}{7}$  \_\_\_\_\_

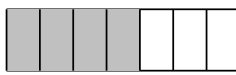
15.  =  $\frac{5}{7}$  \_\_\_\_\_

16.  =  $\frac{7}{10}$  \_\_\_\_\_

17.  =  $\frac{4}{5}$  \_\_\_\_\_

18.  =  $\frac{5}{9}$  \_\_\_\_\_

19.  =  $\frac{4}{5}$  \_\_\_\_\_

20.  =  $\frac{4}{7}$  \_\_\_\_\_