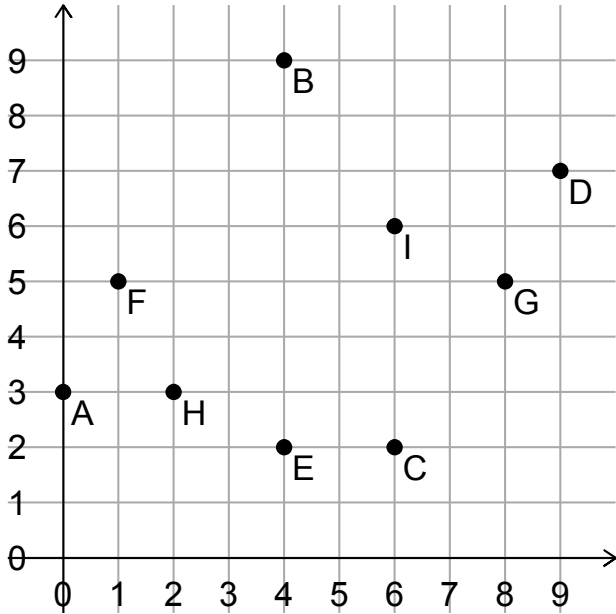


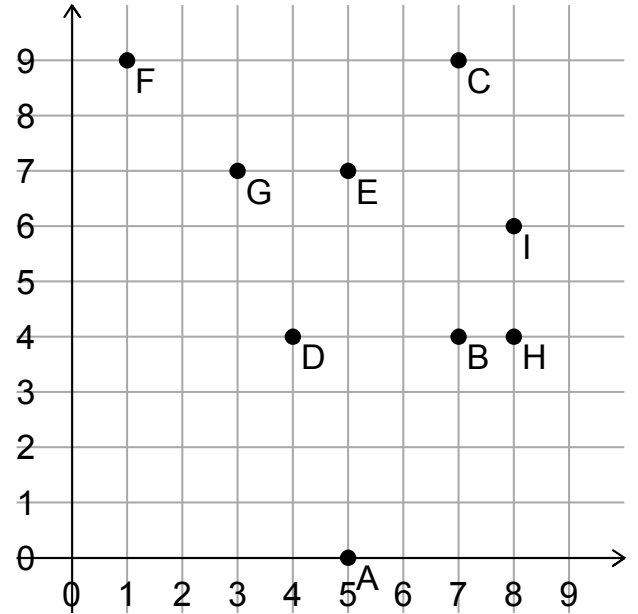
# Co-ordinates

1.



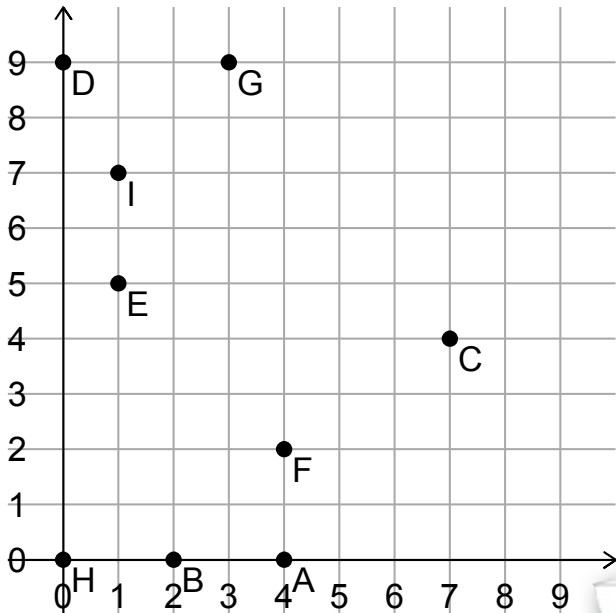
A = \_\_\_\_\_ B = \_\_\_\_\_ C = \_\_\_\_\_  
 D = \_\_\_\_\_ E = \_\_\_\_\_ F = \_\_\_\_\_  
 G = \_\_\_\_\_ H = \_\_\_\_\_ I = \_\_\_\_\_

2.



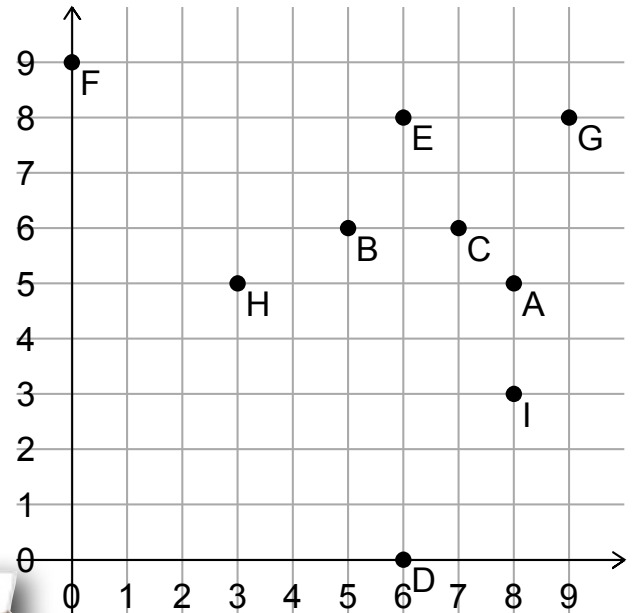
A = \_\_\_\_\_ B = \_\_\_\_\_ C = \_\_\_\_\_  
 D = \_\_\_\_\_ E = \_\_\_\_\_ F = \_\_\_\_\_  
 G = \_\_\_\_\_ H = \_\_\_\_\_ I = \_\_\_\_\_

3.



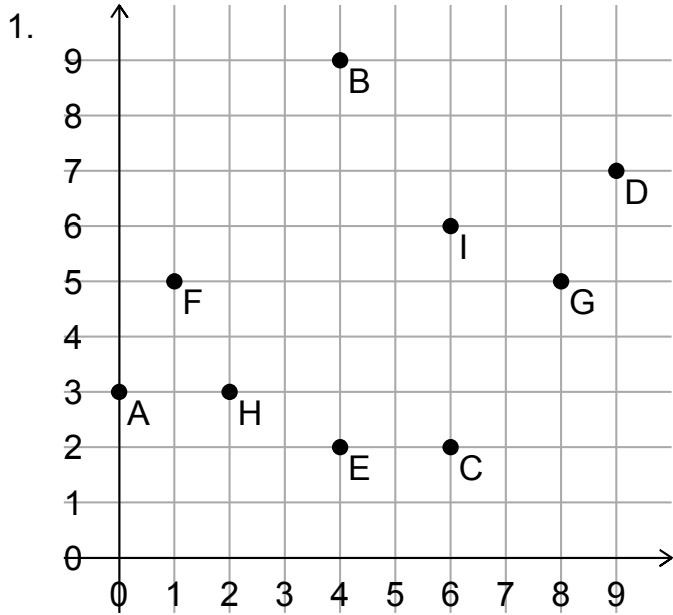
A = \_\_\_\_\_ B = \_\_\_\_\_ C = \_\_\_\_\_  
 D = \_\_\_\_\_ E = \_\_\_\_\_ F = \_\_\_\_\_  
 G = \_\_\_\_\_ H = \_\_\_\_\_ I = \_\_\_\_\_

4.

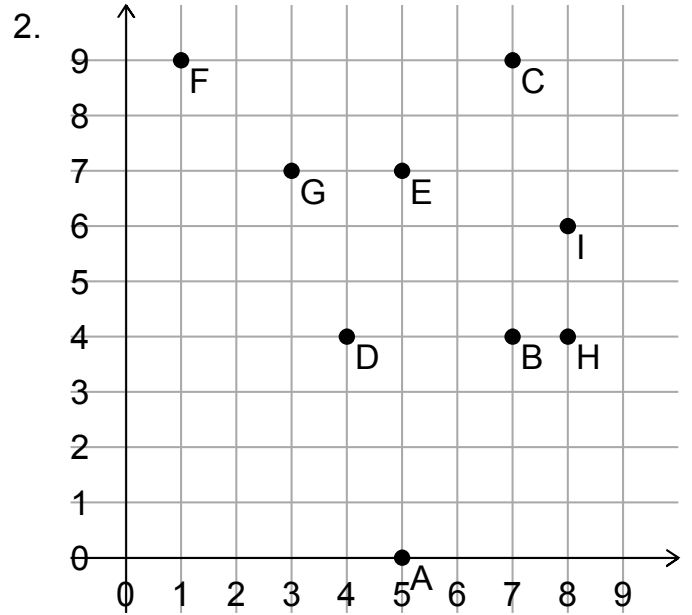


A = \_\_\_\_\_ B = \_\_\_\_\_ C = \_\_\_\_\_  
 D = \_\_\_\_\_ E = \_\_\_\_\_ F = \_\_\_\_\_  
 G = \_\_\_\_\_ H = \_\_\_\_\_ I = \_\_\_\_\_

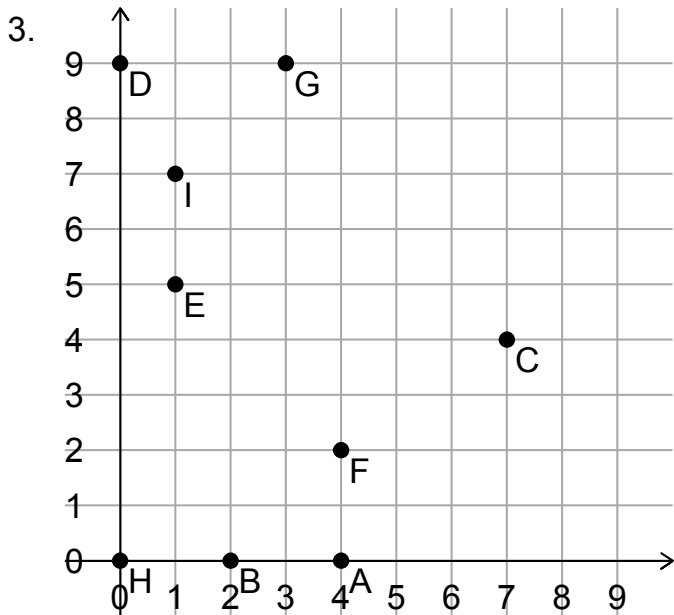




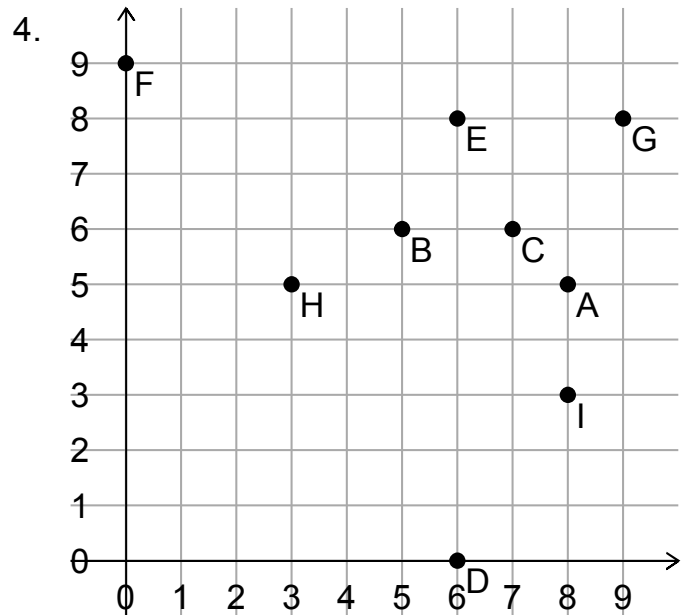
$A = (0, 3)$      $B = (4, 9)$      $C = (6, 2)$   
 $D = (9, 7)$      $E = (4, 2)$      $F = (1, 5)$   
 $G = (8, 5)$      $H = (2, 3)$      $I = (6, 6)$



$A = (5, 0)$      $B = (7, 4)$      $C = (7, 9)$   
 $D = (4, 4)$      $E = (5, 7)$      $F = (1, 9)$   
 $G = (3, 7)$      $H = (8, 4)$      $I = (8, 6)$



$A = (4, 0)$      $B = (2, 0)$      $C = (7, 4)$   
 $D = (0, 9)$      $E = (1, 5)$      $F = (4, 2)$   
 $G = (3, 9)$      $H = (0, 0)$      $I = (1, 7)$



$A = (8, 5)$      $B = (5, 6)$      $C = (7, 6)$   
 $D = (6, 0)$      $E = (6, 8)$      $F = (0, 9)$   
 $G = (9, 8)$      $H = (3, 5)$      $I = (8, 3)$