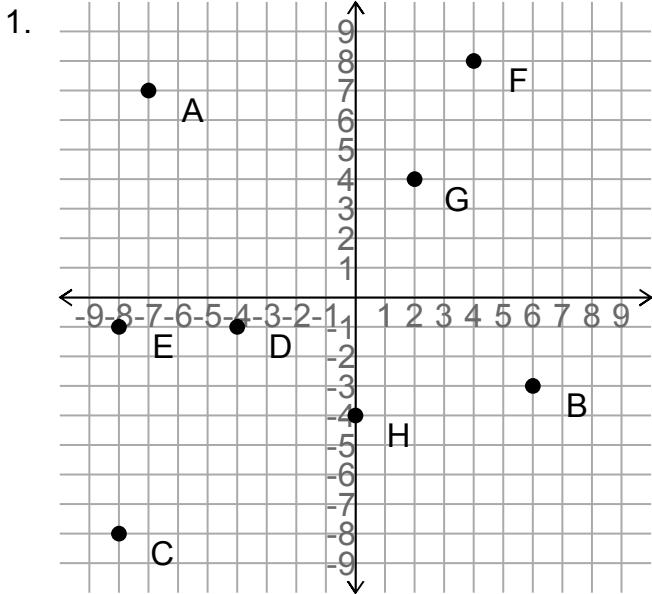
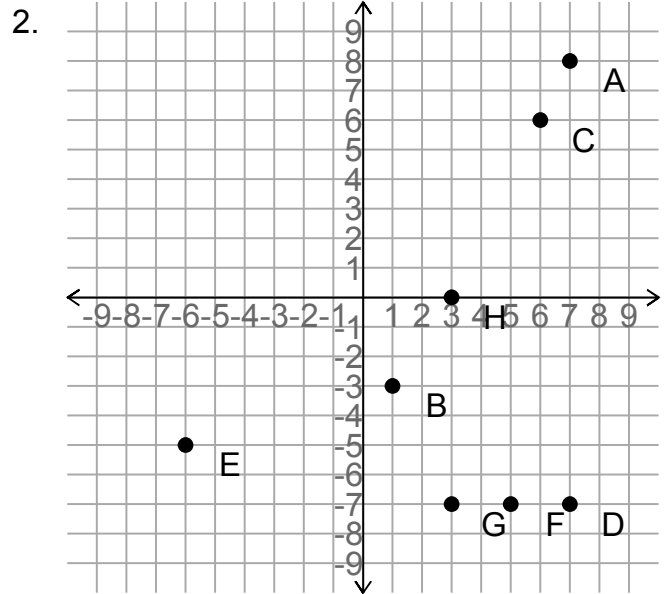


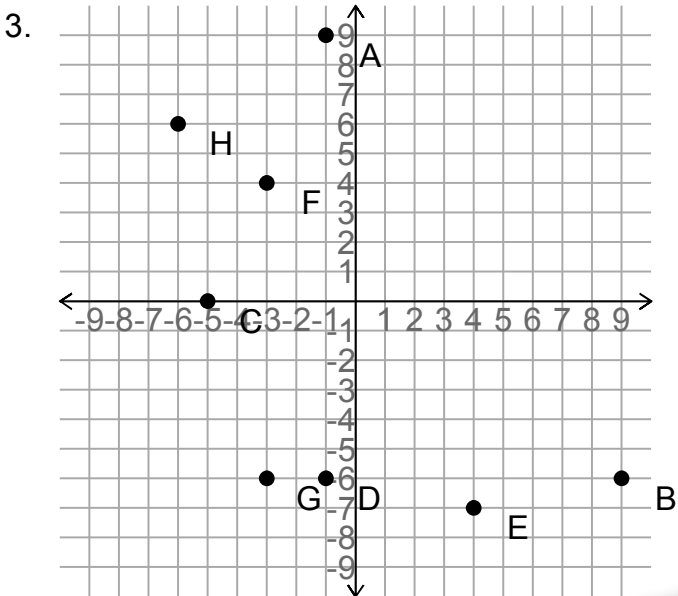
Co-ordinates



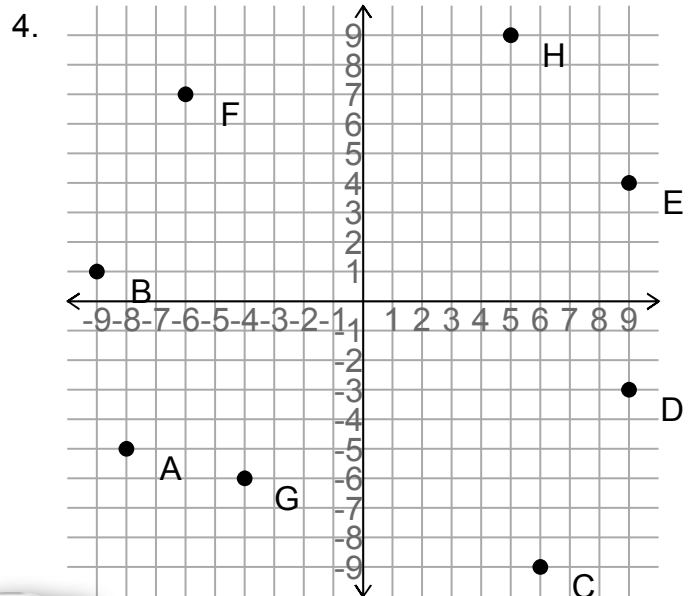
A = _____ B = _____
 C = _____ D = _____
 E = _____ F = _____
 G = _____ H = _____



A = _____ B = _____
 C = _____ D = _____
 E = _____ F = _____
 G = _____ H = _____



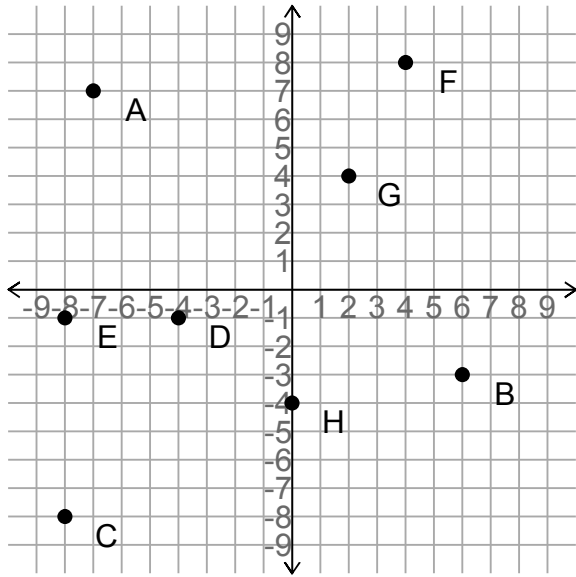
A = _____ B = _____
 C = _____ D = _____
 E = _____ F = _____
 G = _____ H = _____



A = _____ B = _____
 C = _____ D = _____
 E = _____ F = _____
 G = _____ H = _____

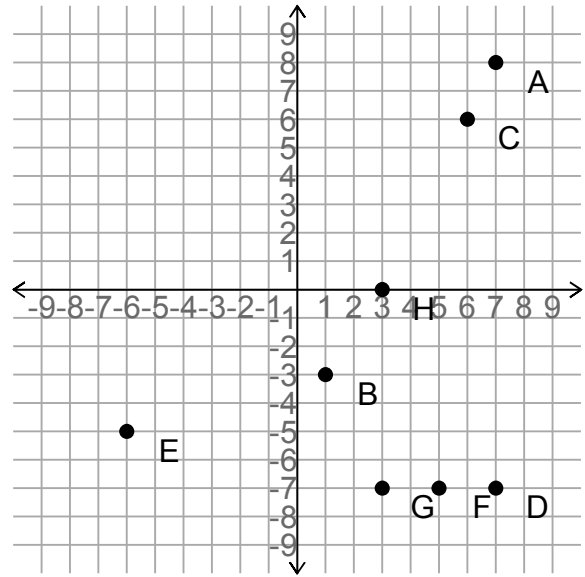


1.



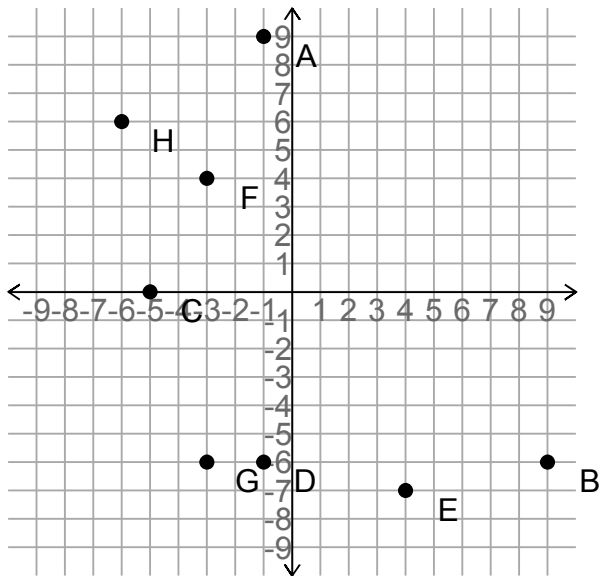
$A = (-7, 7)$	$B = (6, -3)$
$C = (-8, -8)$	$D = (-4, -1)$
$E = (-8, -1)$	$F = (4, 8)$
$G = (2, 4)$	$H = (0, -4)$

2.



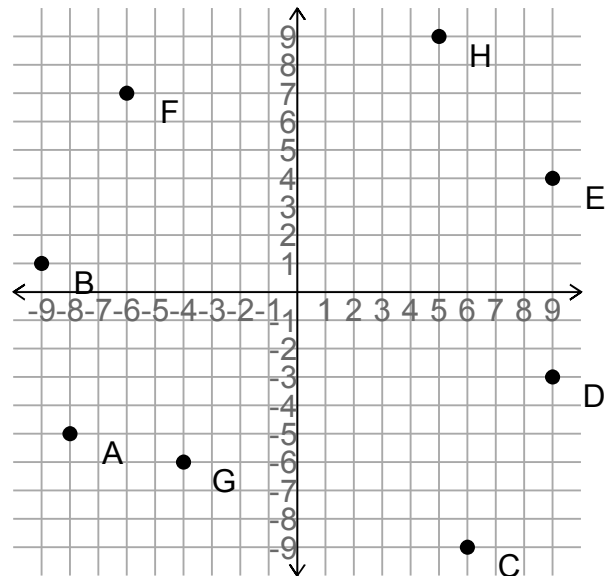
$A = (7, 8)$	$B = (1, -3)$
$C = (6, 6)$	$D = (7, -7)$
$E = (-6, -5)$	$F = (5, -7)$
$G = (3, -7)$	$H = (3, 0)$

3.



$A = (-1, 9)$	$B = (9, -6)$
$C = (-5, 0)$	$D = (-1, -6)$
$E = (4, -7)$	$F = (-3, 4)$
$G = (-3, -6)$	$H = (-6, 6)$

4.



$A = (-8, -5)$	$B = (-9, 1)$
$C = (6, -9)$	$D = (9, -3)$
$E = (9, 4)$	$F = (-6, 7)$
$G = (-4, -6)$	$H = (5, 9)$