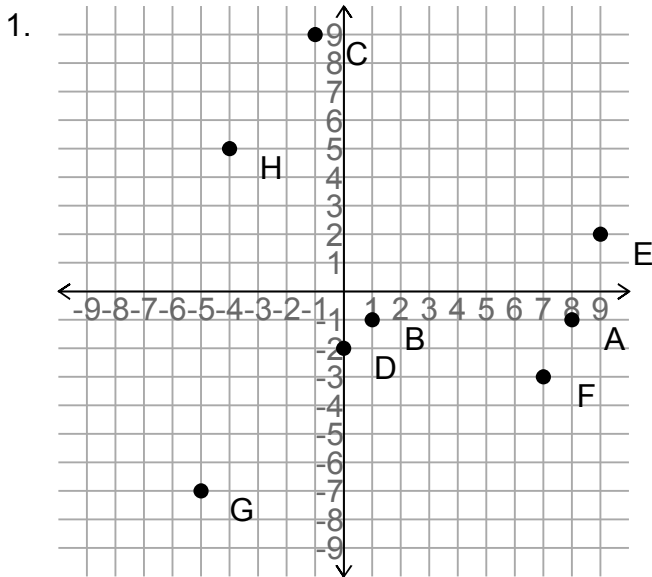
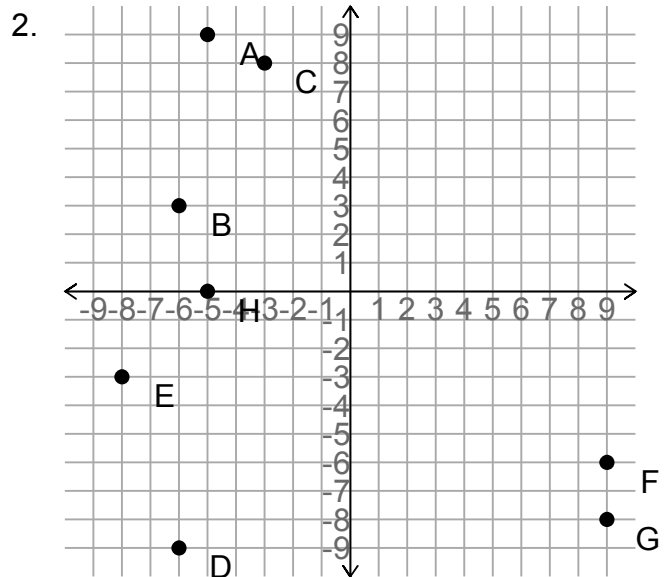


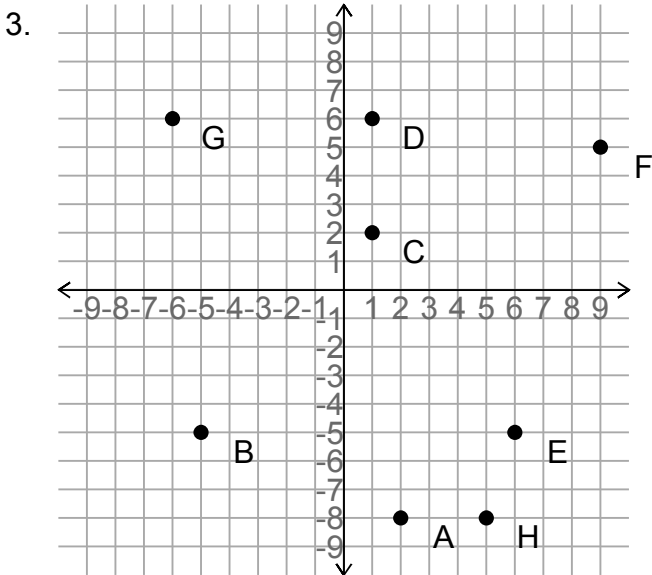
Co-ordinates



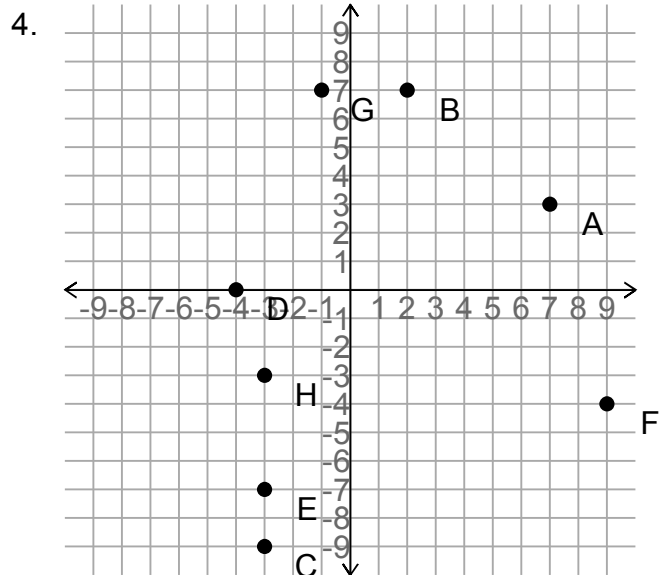
A = _____ B = _____
 C = _____ D = _____
 E = _____ F = _____
 G = _____ H = _____



A = _____ B = _____
 C = _____ D = _____
 E = _____ F = _____
 G = _____ H = _____



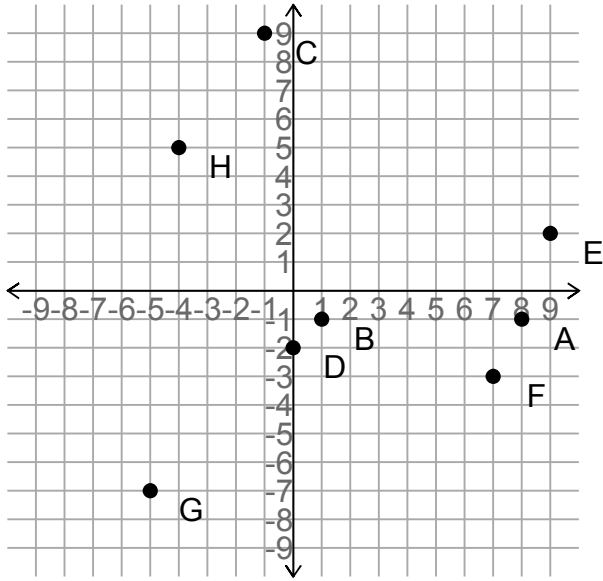
A = _____ B = _____
 C = _____ D = _____
 E = _____ F = _____
 G = _____ H = _____



A = _____ B = _____
 C = _____ D = _____
 E = _____ F = _____
 G = _____ H = _____

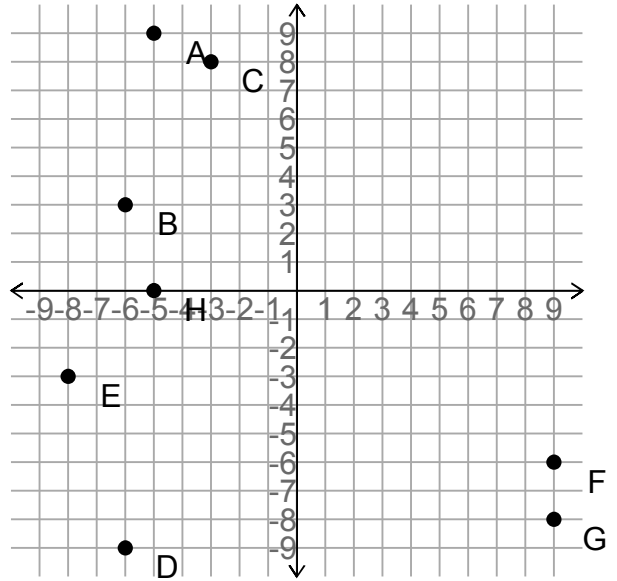


1.



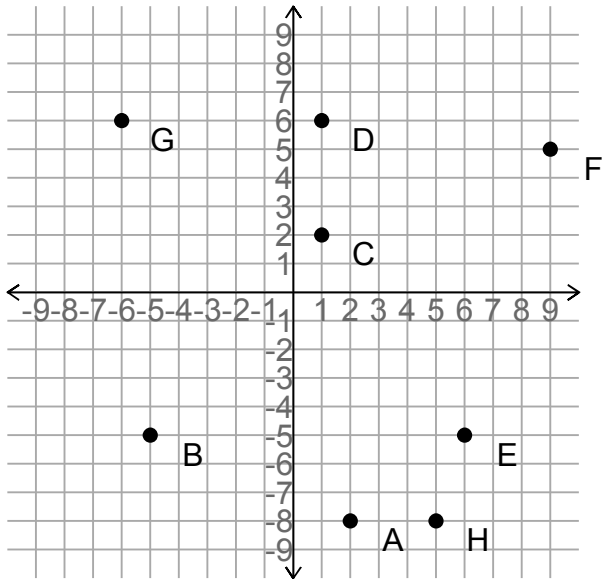
$A = (8, -1)$ $B = (1, -1)$
 $C = (-1, 9)$ $D = (0, -2)$
 $E = (9, 2)$ $F = (7, -3)$
 $G = (-5, -7)$ $H = (-4, 5)$

2.



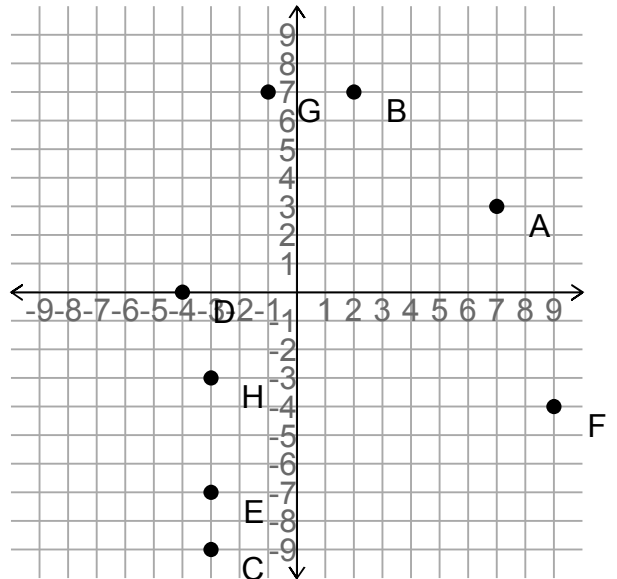
$A = (-5, 9)$ $B = (-6, 3)$
 $C = (-3, 8)$ $D = (-6, -9)$
 $E = (-8, -3)$ $F = (9, -6)$
 $G = (9, -8)$ $H = (-5, 0)$

3.



$A = (2, -8)$ $B = (-5, -5)$
 $C = (1, 2)$ $D = (1, 6)$
 $E = (6, -5)$ $F = (9, 5)$
 $G = (-6, 6)$ $H = (5, -8)$

4.



$A = (7, 3)$ $B = (2, 7)$
 $C = (-3, -9)$ $D = (-4, 0)$
 $E = (-3, -7)$ $F = (9, -4)$
 $G = (-1, 7)$ $H = (-3, -3)$