

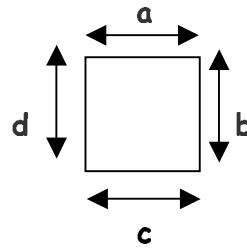
Name: _____

Date: _____


What is a perimeter? *A perimeter is the distance all the way around the edge of something, the boundary.*

What is the perimeter of this shape?


Show your workings: $a + b + c + d$




Work out the perimeters of the following shapes:




Show your workings:




Show your workings:




Show your workings:




Show your workings:



Show your workings:



Show your workings:



Show your workings:



Show your workings:

Can you name all of the shapes? Write the name inside the shape.

Put these in order with the largest perimeter first, estimate, and do not measure them.

Door

Desk

Worksheet

Classroom

Contributed to **Teaching Ideas for Primary Teachers** –
<http://www.teachingideas.co.uk>